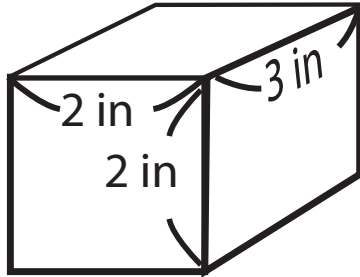


Elementary Math Worksheet
8th Grade Math Worksheet
Volume

Answers

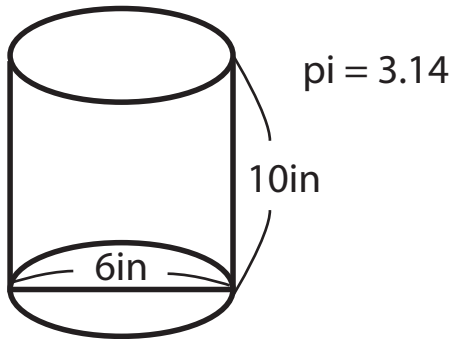
Find the volume of each shape below.

1.



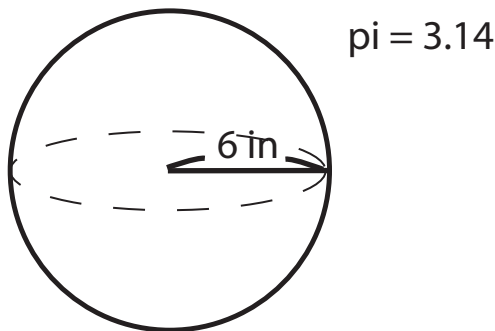
Answer: 12in³

2.



Answer: 282.6in³

3.



Answer: 904.3in³