

# Elementary Math Worksheet

## 7th Grade Math Worksheet

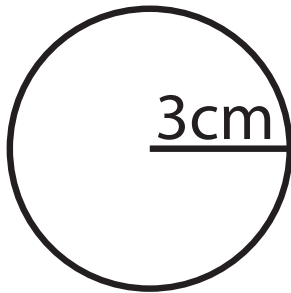
### Areas of circles

## Answers

Find the area of each circle.

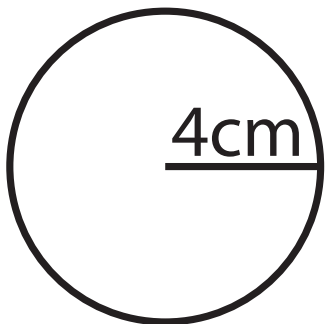
Use 3.14 as the value of Pi.

1.



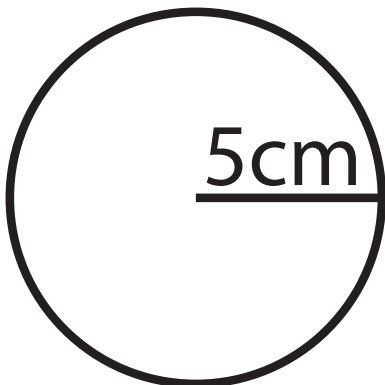
$$\text{Area} = \underline{28.26} \text{ cm}^2$$

2.



$$\text{Area} = \underline{50.24} \text{ cm}^2$$

3.



$$\text{Area} = \underline{78.5} \text{ cm}^2$$