


# Elementary Math Worksheet

## 3rd Grade Math Worksheet


### Fractions


## Answers

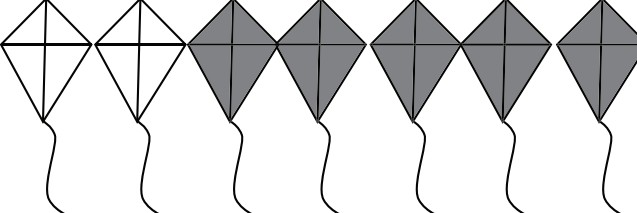
A fraction is a number that can represent part of a group.  
In the example below, 2 of the 3 animals are rabbits.

This is written as  $\frac{2}{3}$  . 

What part of the group of images are shaded?  
Write the fraction.

1.   $\frac{1}{4}$

2.   $\frac{2}{5}$

3.   $\frac{5}{7}$