

Elementary Math Worksheet

7th Grade Math Worksheet

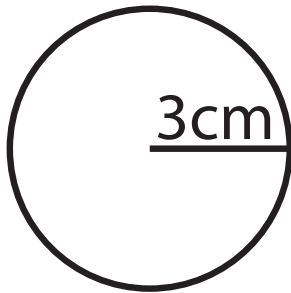
Area of Circles

NAME _____

Find the area of each circle.

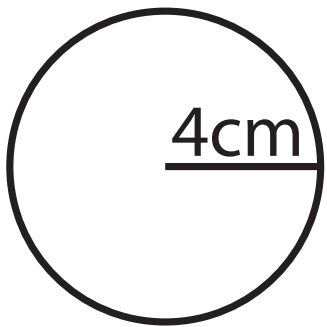
Use 3.14 as the value of Pi.

1.



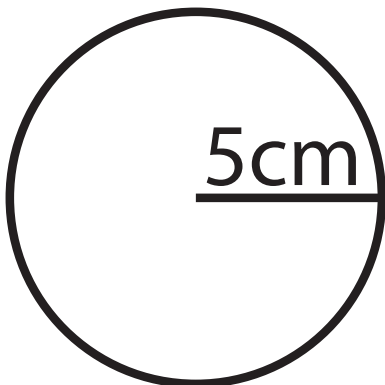
Area = _____ cm^2

2.



Area = _____ cm^2

3.



Area = _____ cm^2